

3

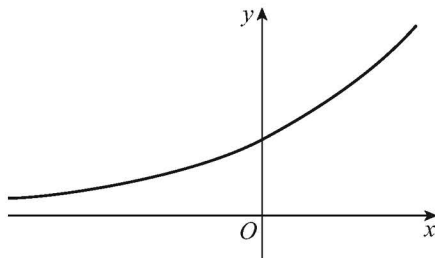
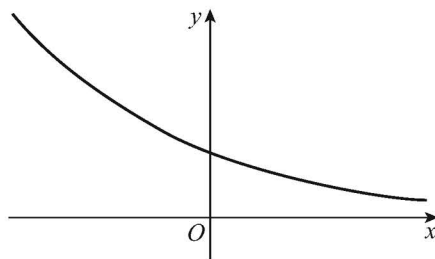
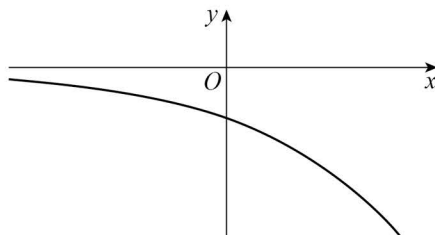
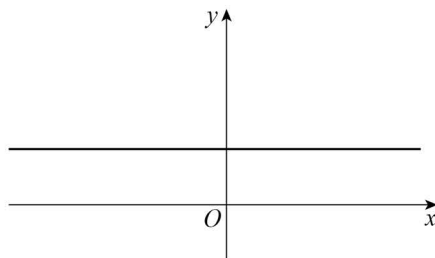
One of the graphs shown below **cannot** have an equation of the form

$$y = a^x \quad \text{where } a > 0$$

Identify this graph.

Tick (✓) **one** box.

[1 mark]

☐☐☐☐